

PRACTICE SHEET - 9

Org by - ABACUS ACADEMY, KALNA

SENIOR
Level

Name : _____

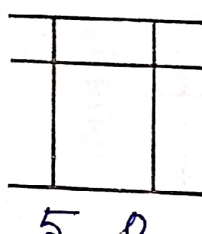
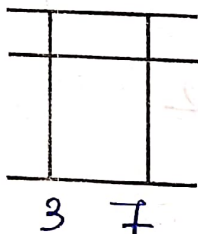
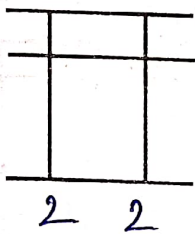
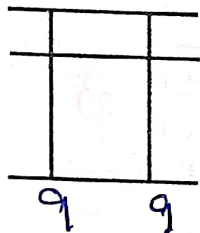
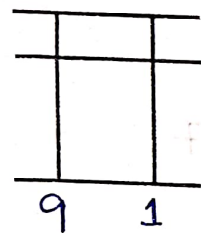
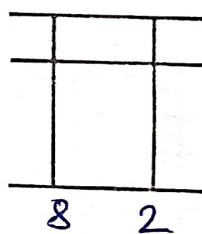
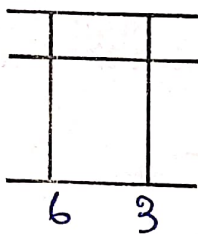
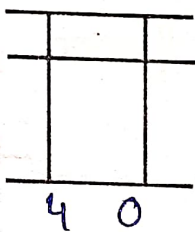
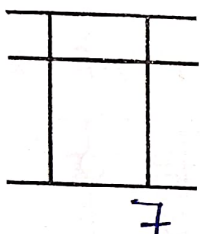
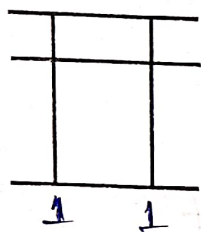
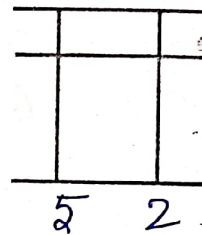
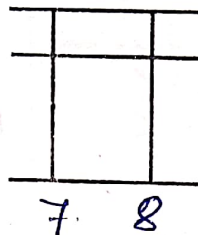
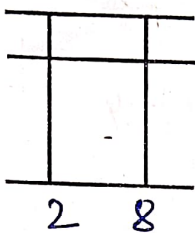
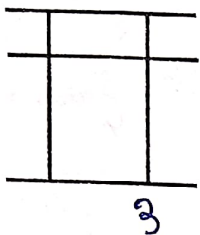
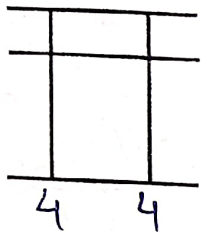
Centre Name : _____

TIME = 5 MIN

FULL MARKS = 50

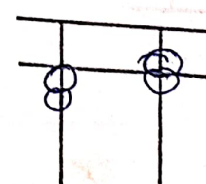
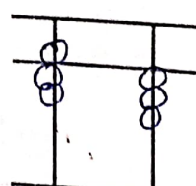
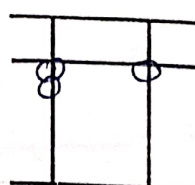
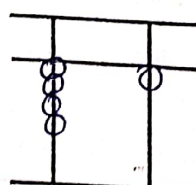
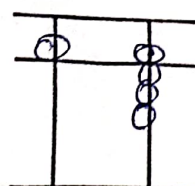
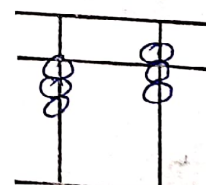
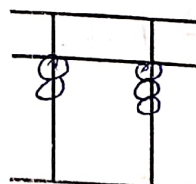
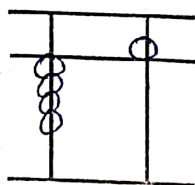
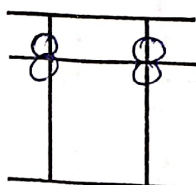
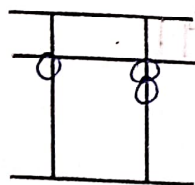
DRAW THE BEADS :

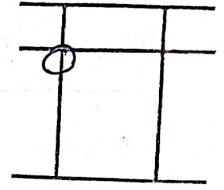
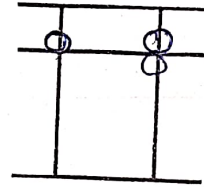
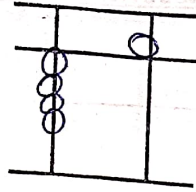
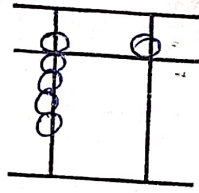
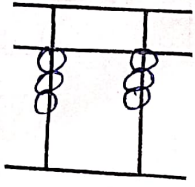
15 X 1 = 15



WRITE THE VALUE OF THE BEADS :

15 X 1 = 15





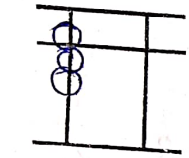
Addition (On Tool)

$10 \times 1 = 10$

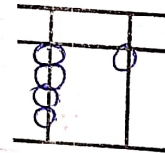
1	2	3	4	5	6	7	8	9	10
1	1	5	5	3	3	8	8	6	9
1	2	2	1	1	-3	8	8	3	-8
2	6	2	1	-4	8	-3	-7	3	8
						4	8	-7	6

Match the Following

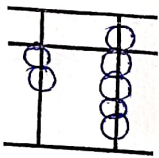
$10 \times 1 = 10$



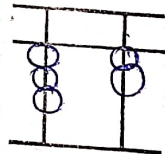
2



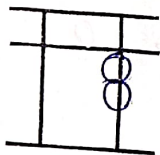
17



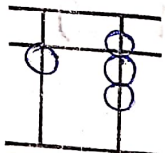
62



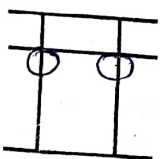
27



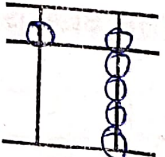
70



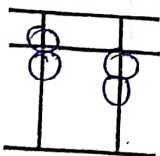
59



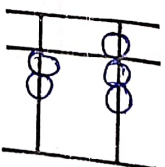
29



41



41



32

TABLE 1

TABLE 2

TABLE 3