

PRACTICE SHEET - 4

Org by - ABACUS ACADEMY, KALNA

**SENIOR
Level**

Name : _____

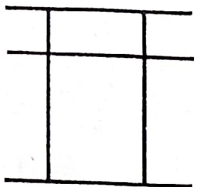
Centre Name : _____

TIME = 5 MIN

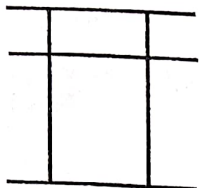
FULL MARKS = 50

DRAW THE BEADS :

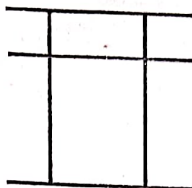
15 X 1 = 15



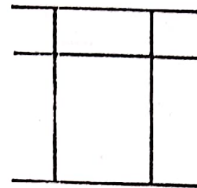
33



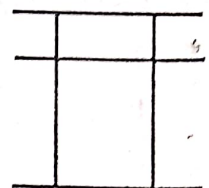
42



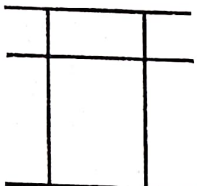
25



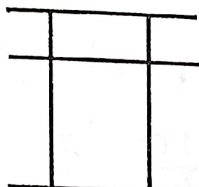
39



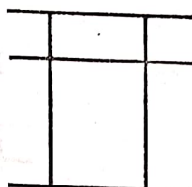
56



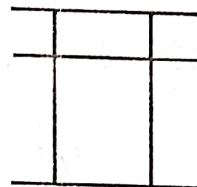
21



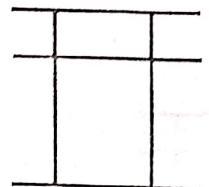
18



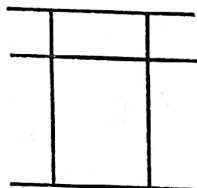
50



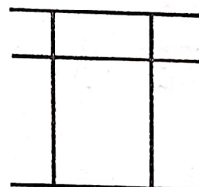
63



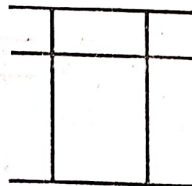
20



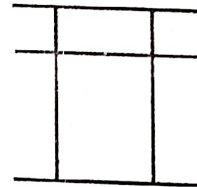
8



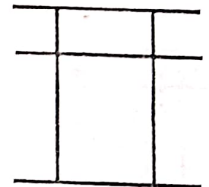
6



7



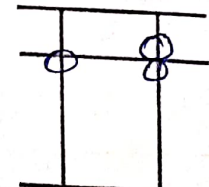
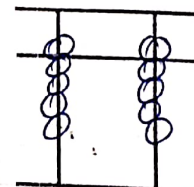
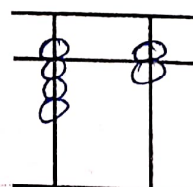
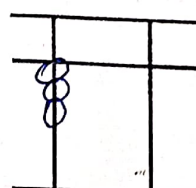
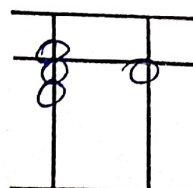
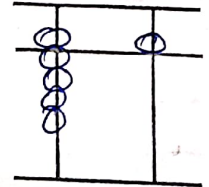
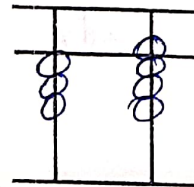
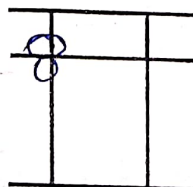
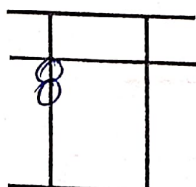
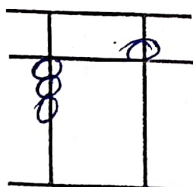
31

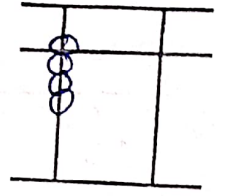
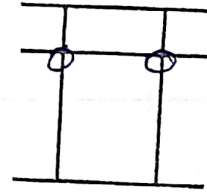
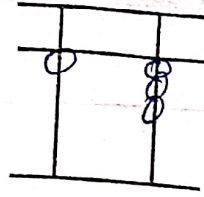
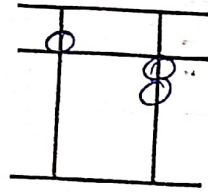
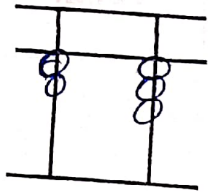


25

WRITE THE VALUE OF THE BEADS :

15 X 1 = 15





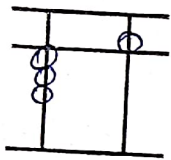
Addition (On Tool)

$10 \times 1 = 10$

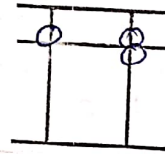
1	2	3	4	5	6	7	8	9	10
2	4	3	2	2	3	4	5	4	5
1	-3	1	1	5	5	5	1	5	5
1	1	-2	-3	2	-1	-5	2	-5	2
									1

Match the Following

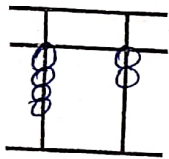
$10 \times 1 = 10$



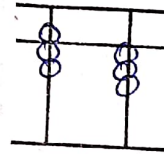
42



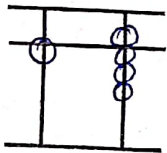
29



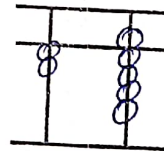
35



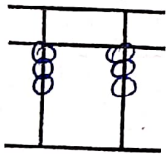
56



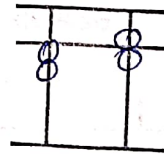
21



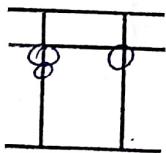
73



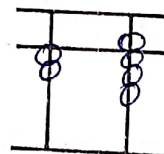
18



28



33



26

TABLE 1 _____

TABLE 2 _____

TABLE 3 _____