

PRACTICE SHEET - 3

Org by - ABACUS ACADEMY, KALINA

SENIOR
Level

Name : _____

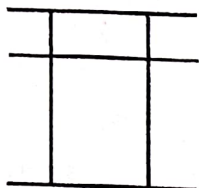
Centre Name : _____

TIME = 5 MIN

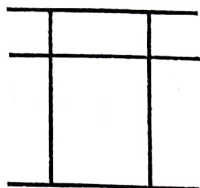
FULL MARKS = 50

DRAW THE BEADS :

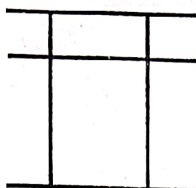
$15 \times 1 = 15$



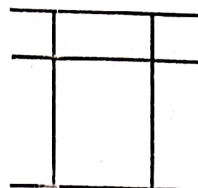
2 5



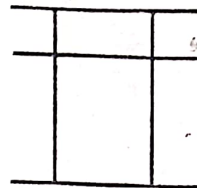
7 7



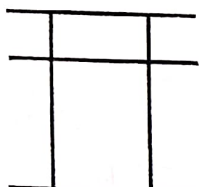
3 8



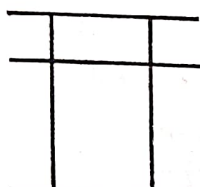
9 2



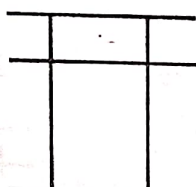
4 6



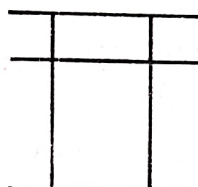
5 5



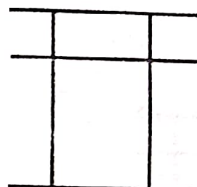
1 1



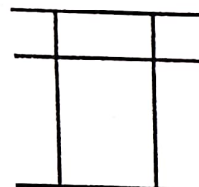
2 9



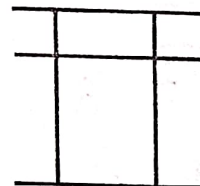
4 2



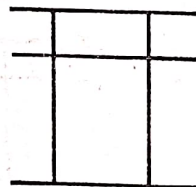
5 7



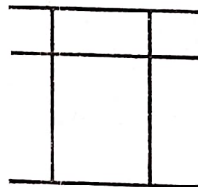
6 3



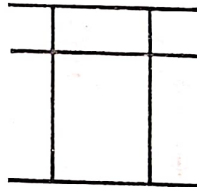
7 2



8 1



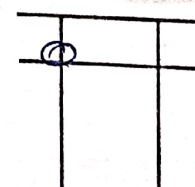
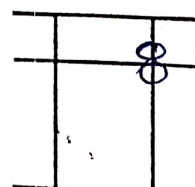
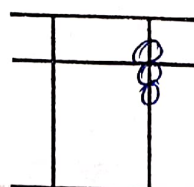
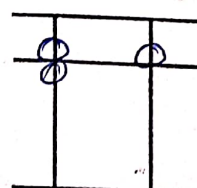
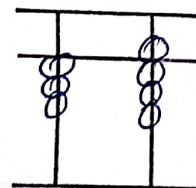
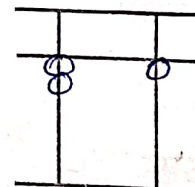
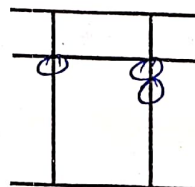
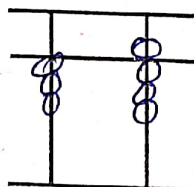
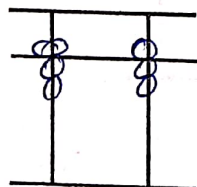
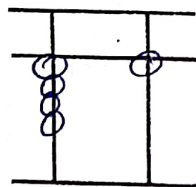
6 0

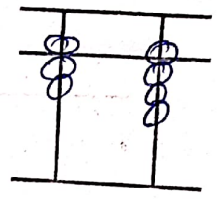
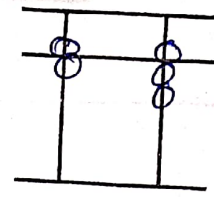
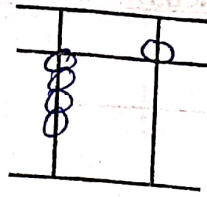
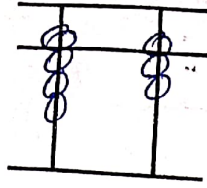
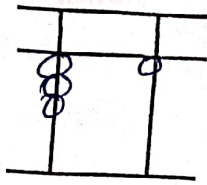


3 0

WRITE THE VALUE OF THE BEADS :

$15 \times 1 = 15$





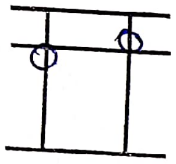
Addition (On Tool)

$10 \times 1 = 10$

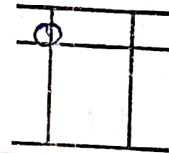
1	2	3	4	5	6	7	8	9	10
7	2	3	9	9	2	1	2	8	9
-2	6	6	-7	-8	7	6	7	-3	-6
4	-5	-7	-1	8	-8	-7	-9	4	-3

Match the Following

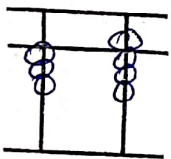
$10 \times 1 = 10$



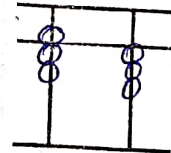
38



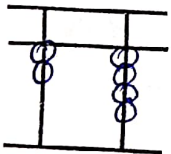
71



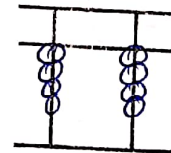
24



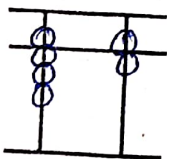
22



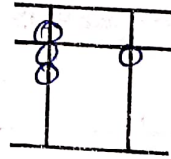
92



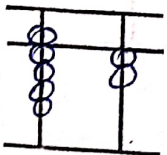
50



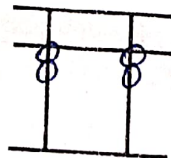
86



73



15



44

TABLE 1

TABLE 2

TABLE 3