

PRACTICE SHEET - 2

Org by - ABACUS ACADEMY, KALNA

SENIOR

Level

Name : _____

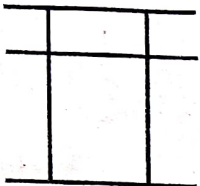
Centre Name : _____

TIME = 5 MIN

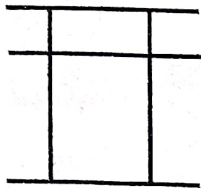
FULL MARKS = 50

DRAW THE BEADS :

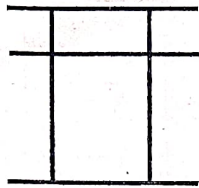
15 X 1 = 15



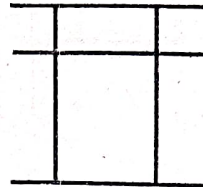
3 9



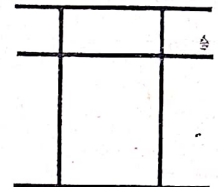
2 5



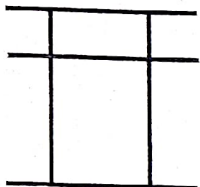
8 6



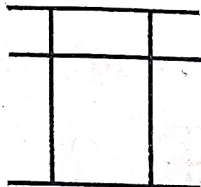
4 3



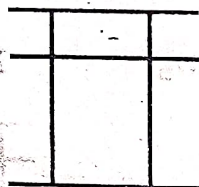
2 4



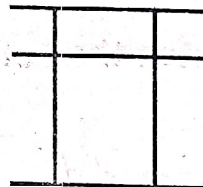
7 7



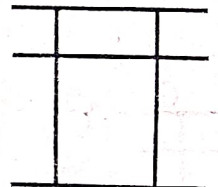
5 0



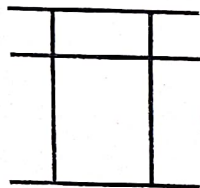
1 3



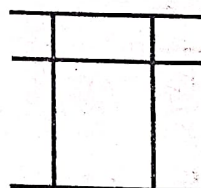
2 2



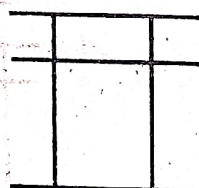
6 7



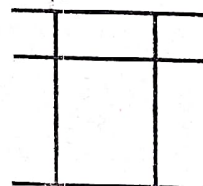
8 2




3 8



5 2



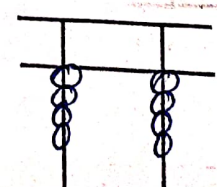
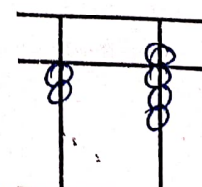
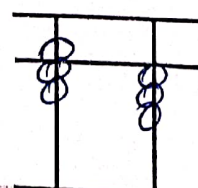
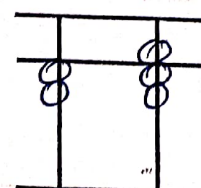
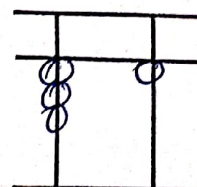
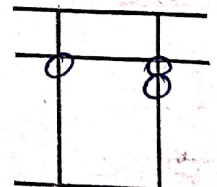
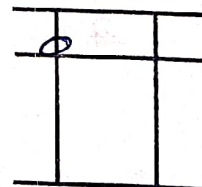
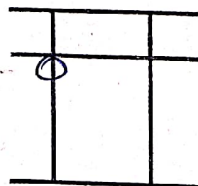
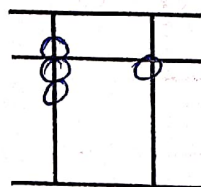
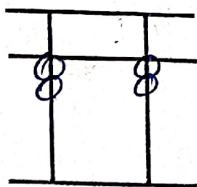
4 2

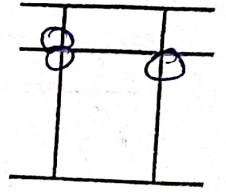
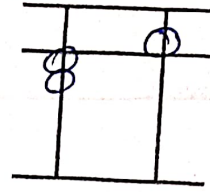
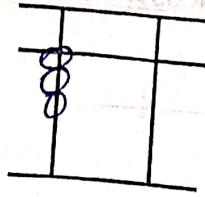
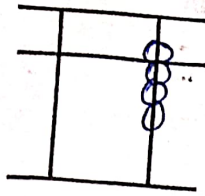
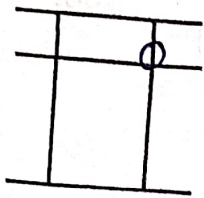


7 7

WRITE THE VALUE OF THE BEADS :

15 X 1 = 15





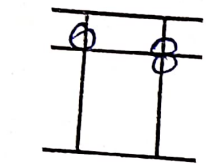
Addition (On Tool)

$10 \times 1 = 10$

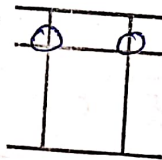
1	2	3	4	5	6	7	8	9	10
3	9	8	1	1	1	1	2	1	9
2	-8	-6	5	6	7	8	7	6	-6
-7	6	7	3	-5	-6	-9	-8	-5	5

Match the Following

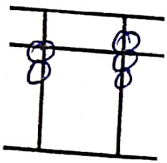
$10 \times 1 = 10$



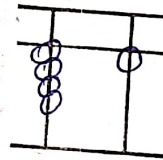
27



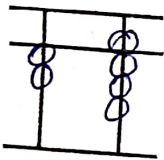
22



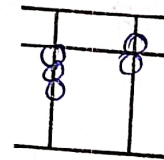
33



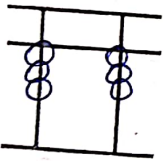
11



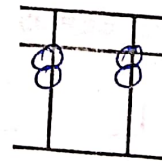
44



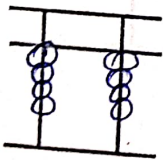
55



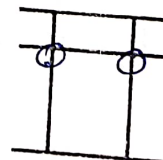
56



41



28



36

TABLE 1 _____

TABLE 2 _____

TABLE 3 _____