

PRACTICE SHEET - 19

Org by - ABACUS ACADEMY, KALNA

SENIOR
Level

Name : _____

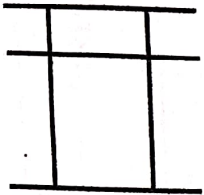
Centre Name : _____

TIME = 5 MIN

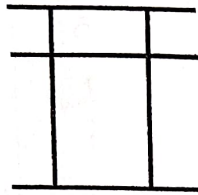
FULL MARKS = 50

DRAW THE BEADS :

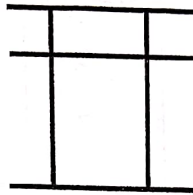
15 X 1 = 15



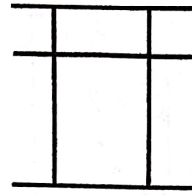
28



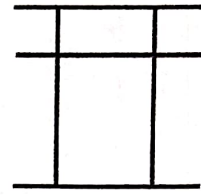
39



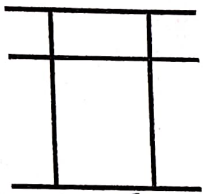
46



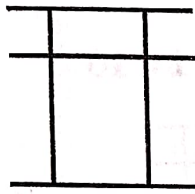
55



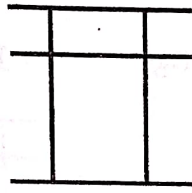
12



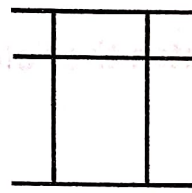
8



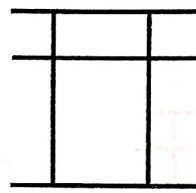
71



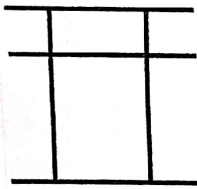
94



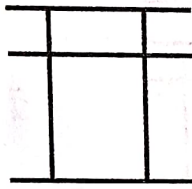
36



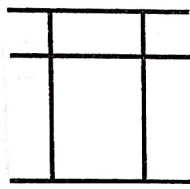
67



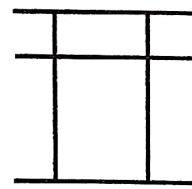
16



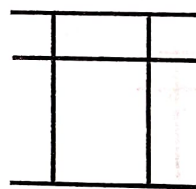
0



25



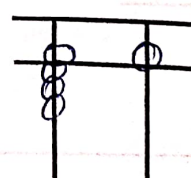
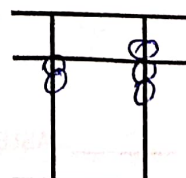
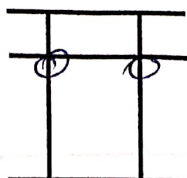
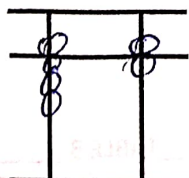
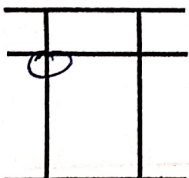
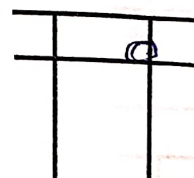
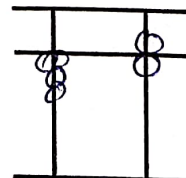
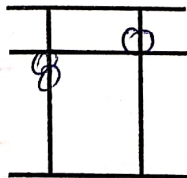
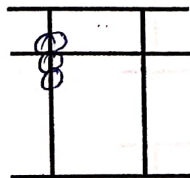
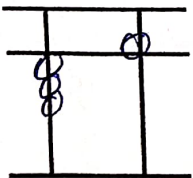
41

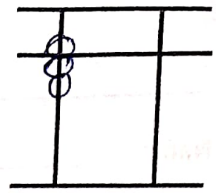
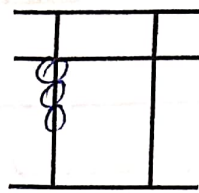
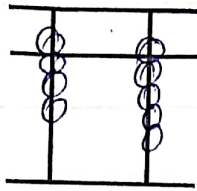
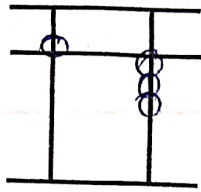
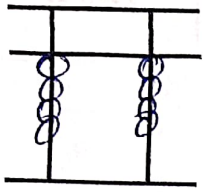


88

WRITE THE VALUE OF THE BEADS :

15 X 1 = 15





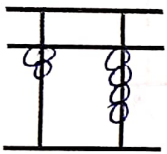
Addition (On Tool)

$10 \times 1 = 10$

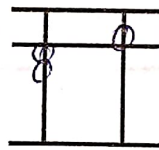
1	2	3	4	5	6	7	8	9	10
8	4	7	2	7	3	9	2	4	5
-6	-4	-2	-2	-6	-2	-7	2	-1	-5
2	3	3	8	5	8	6	5	6	3

Match the Following

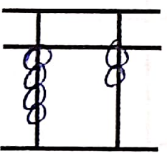
$10 \times 1 = 10$



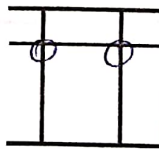
35



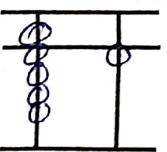
31



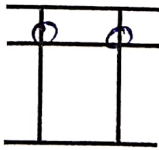
86



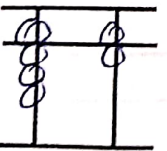
55




42



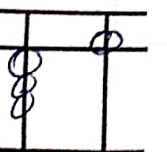
11



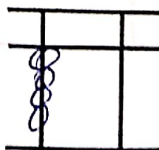
91



40



24



25

TABLE 1 _____ TABLE 2 _____ TABLE 3 _____