

PRACTICE SHEET - 18

Org by - ABACUS ACADEMY, KALNA

SENIOR
Level

Name : _____

Centre Name : _____

TIME = 5 MIN

FULL MARKS = 50

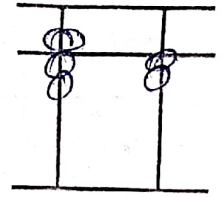
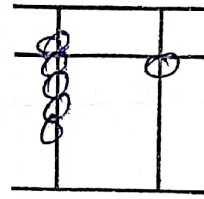
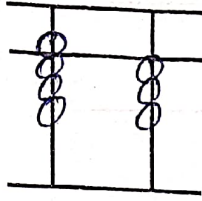
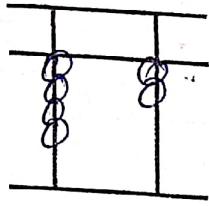
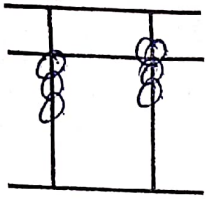
DRAW THE BEADS :

15 X 1 = 15

 1 0	 1 5	 2 5	 3 5	 4 5
 5 5	 9 5	 7 5	 6 5	 5 5
 2 0	 3 0	 6 6	 6 9	 9 9

WRITE THE VALUE OF THE BEADS :

15 X 1 = 15



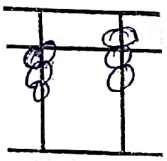
Addition (On Tool)

$10 \times 1 = 10$

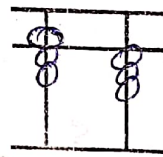
1	2	3	4	5	6	7	8	9	10
9	3	7	3	4	3	4	6	3	2
-4	1	-6	6	5	5	-2	3	6	5
3	5	2	-7	-2	-6	7	-4	-8	-6

Match the Following

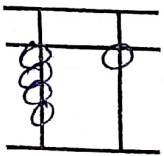
$10 \times 1 = 10$



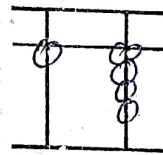
27



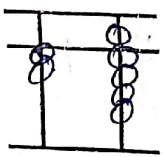
92



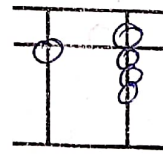
37



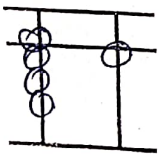
18



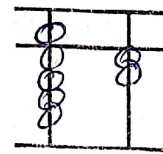
41



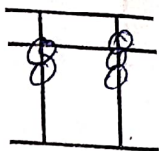
72



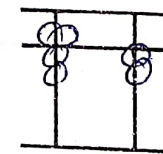
29



14



81



73

TABLE 1

TABLE 2

TABLE 3