

PRACTICE SHEET - 17

Org by - ABACUS ACADEMY, KALNA

SENIOR
Level

Name : _____

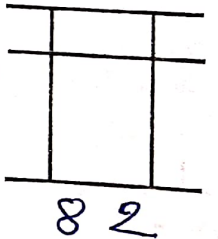
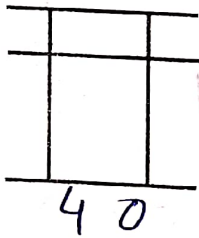
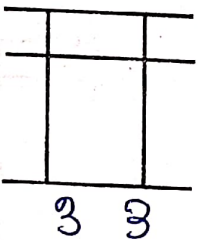
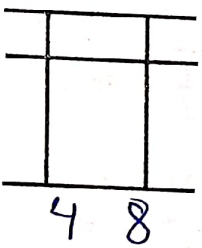
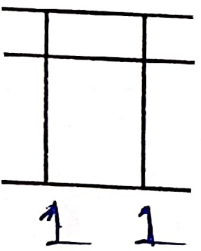
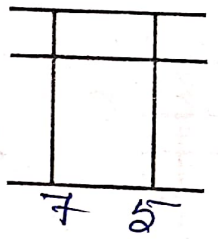
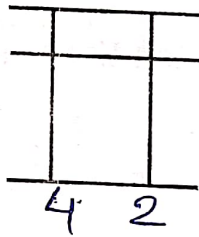
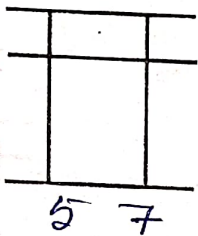
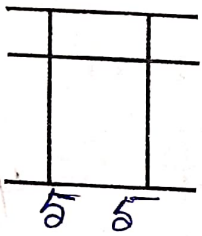
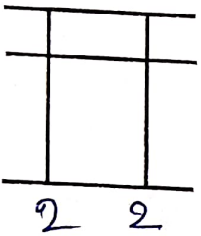
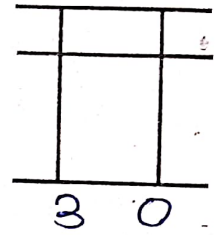
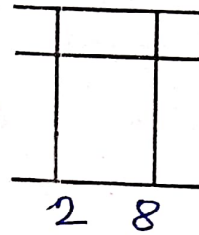
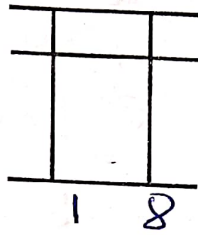
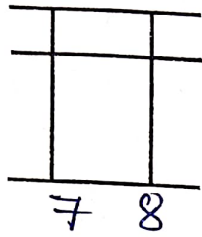
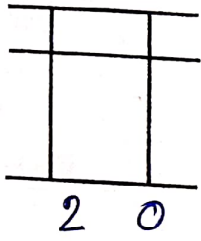
Centre Name : _____

TIME = 5 MIN

FULL MARKS = 50


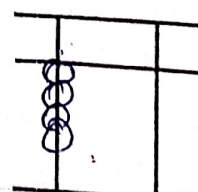
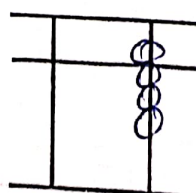
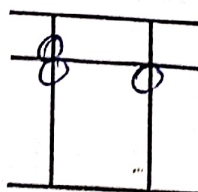
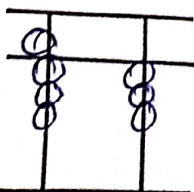
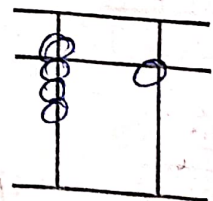
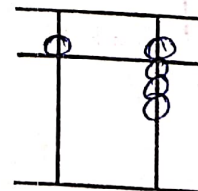
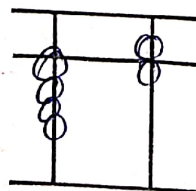
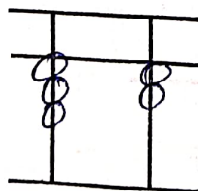
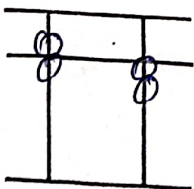
DRAW THE BEADS :

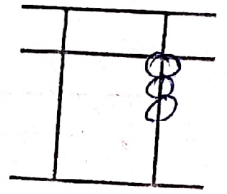
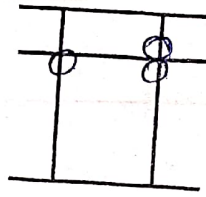
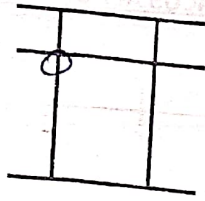
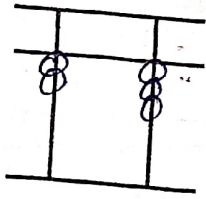
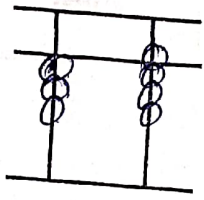
15 X 1 = 15



WRITE THE VALUE OF THE BEADS :

15 X 1 = 15





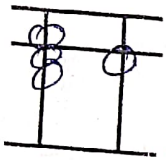
Addition (On Tool)

10 x 1 = 10

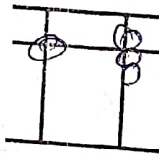
1	2	3	4	5	6	7	8	9	10
8	8	7	8	9	3	9	8	1	3
1	-7	2	-7	-7	5	-6	-5	7	6
-4	2	-6	6	5	-8	5	-3	-6	-8

Match the Following

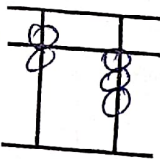
10 x 1 = 10



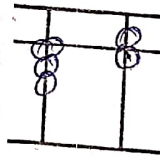
85



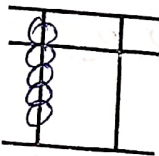
42



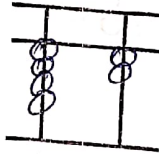
24



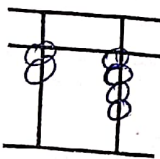
36



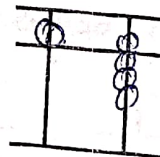
63



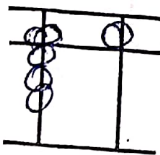
58



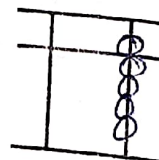
71



9



90



17

TABLE 1

TABLE 2

TABLE 3