

PRACTICE SHEET - 16

Org by - ABACUS ACADEMY, KALNA

**SENIOR
Level**

Name : _____

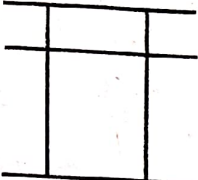
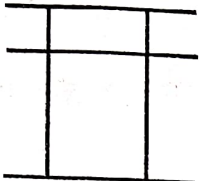

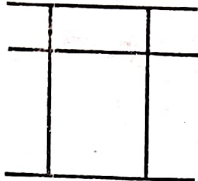
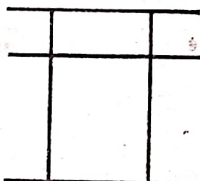
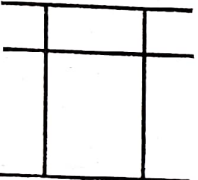
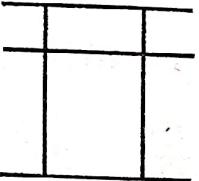
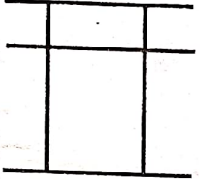
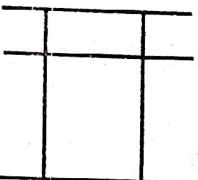
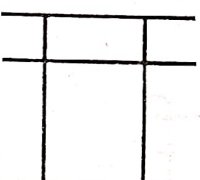
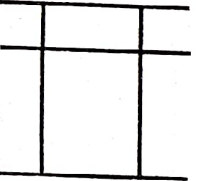
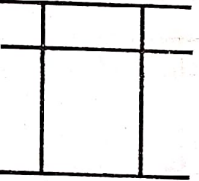

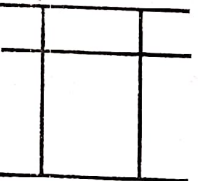
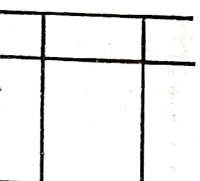
Centre Name : _____

TIME = 5 MIN

FULL MARKS = 50

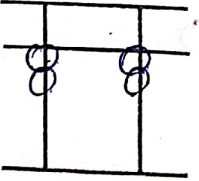

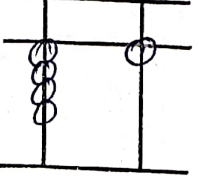
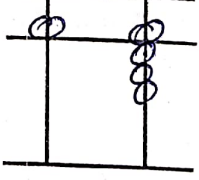
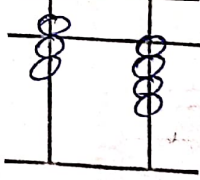
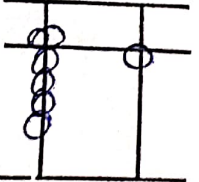
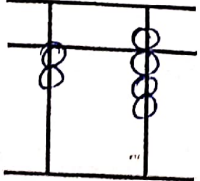
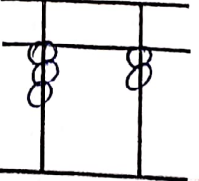

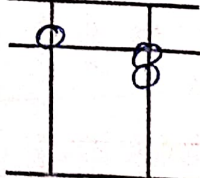
DRAW THE BEADS :

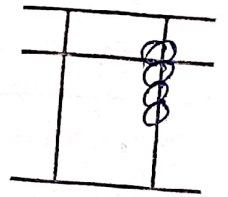
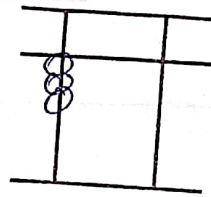
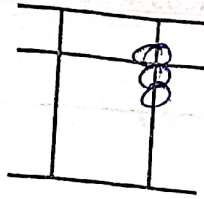
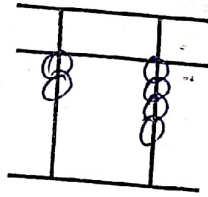
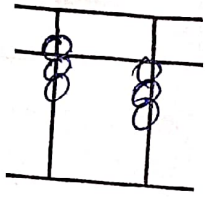
15 X 1 = 15

 <p>7 3</p>	 <p>3 3</p>	 <p>2 3</p>	 <p>4 4</p>	 <p>5 6</p>
 <p>7 2</p>	 <p>9 3</p>	 <p>9 9</p>	 <p>2 1</p>	 <p>3 0</p>
 <p>6 2</p>	 <p>8 1</p>	 <p>8 9</p>	 <p>2 0</p>	 <p>1 0</p>

WRITE THE VALUE OF THE BEADS :

15 X 1 = 15



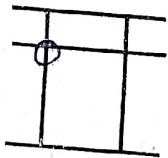
Addition (On Tool)

$10 \times 1 = 10$

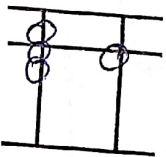
1	2	3	4	5	6	7	8	9	10
1	1	1	9	9	9	8	4	4	4
6	7	8	-8	-7	9	8	4	4	4
-5	-6	-7	6	6	-6	-6	-2	-3	-1
					5	7	1	1	5

Match the Following

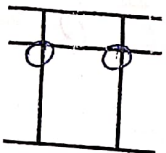
$10 \times 1 = 10$



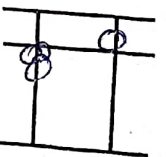
63



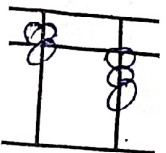
25



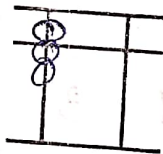
10



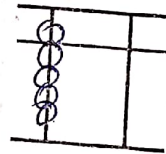
11



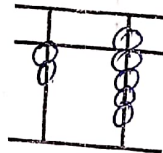
71



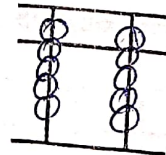
29



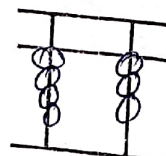
43



70



90



99