

PRACTICE SHEET - 15

Org by - ABACUS ACADEMY, KALNA

**SENIOR
Level**

Name : _____

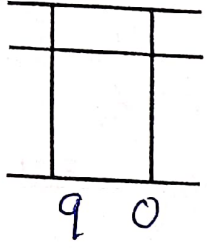
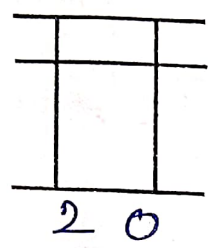
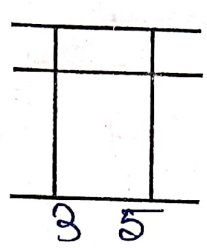
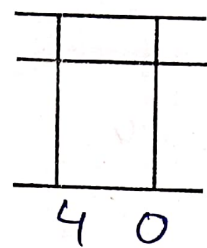
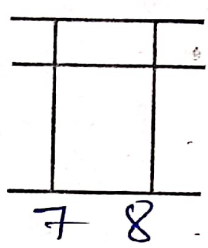
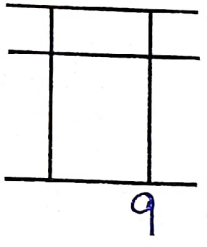
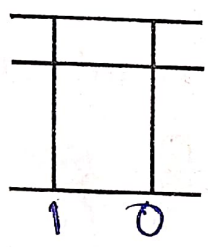
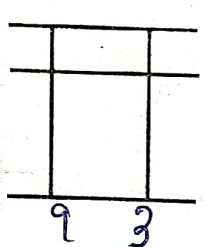
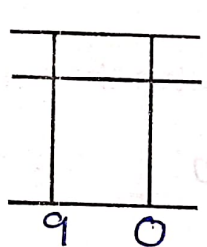
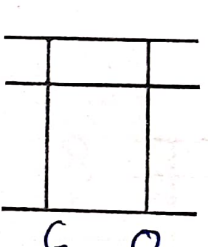
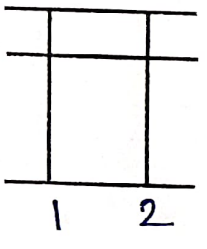
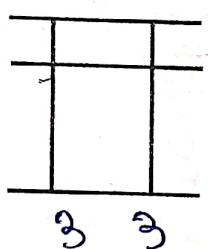
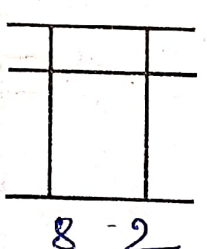
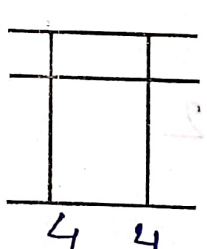
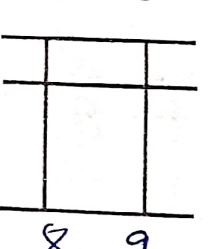
Centre Name : _____

TIME = 5 MIN

FULL MARKS = 50

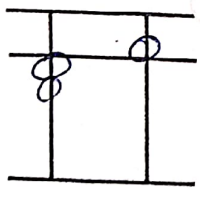
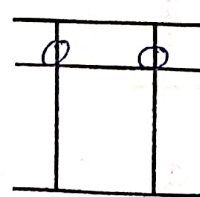
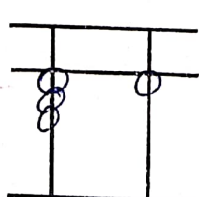
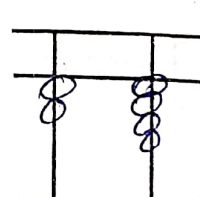
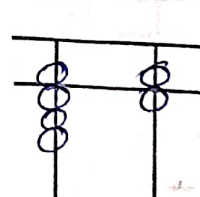
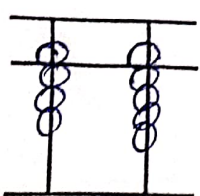
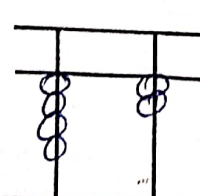
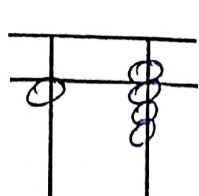
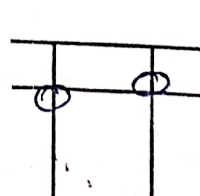
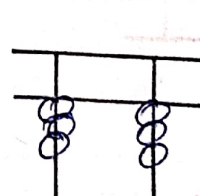
DRAW THE BEADS :

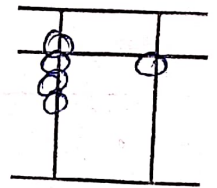
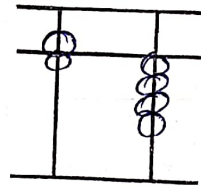
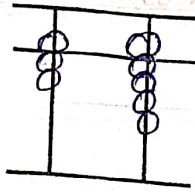
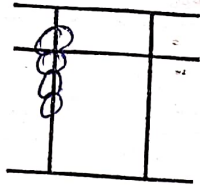
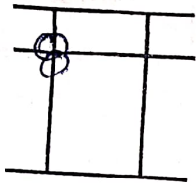
15 X 1 = 15

 9 0	 2 0	 3 5	 4 0	 7 8
 9 0	 1 0	 9 3	 9 0	 6 0
 1 2	 3 3	 8 2	 4 4	 8 9

WRITE THE VALUE OF THE BEADS :

15 X 1 = 15



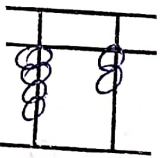
Addition (On Tool)

$10 \times 1 = 10$

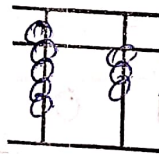
1	2	3	4	5	6	7	8	9	10
2	6	3	9	1	9	7	1	4	3
6	3	6	-7	8	-1	1	8	-2	6
-3	-2	-4	2	-7	-5	-8	-7	6	-7

Match the Following

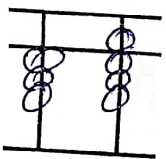
$10 \times 1 = 10$



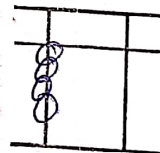
20



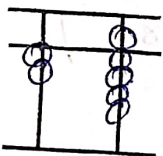
63



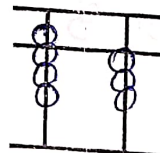
42



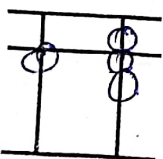
83



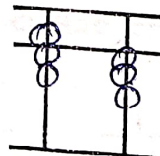
17



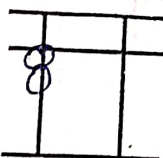
73



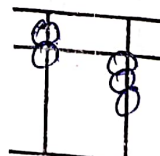
29



40



38



93

TABLE 1

TABLE 2

TABLE 3