

PRACTICE SHEET - 13

Org by - ABACUS ACADEMY, KALNA

SENIOR

Level

Name : _____

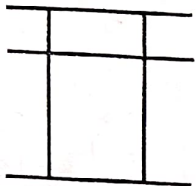
Centre Name : _____

TIME = 5 MIN

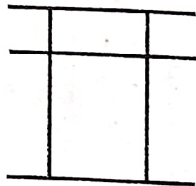
FULL MARKS = 50

DRAW THE BEADS :

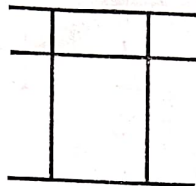
15 X 1 = 15



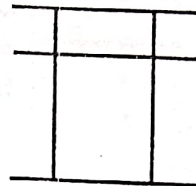
3 7



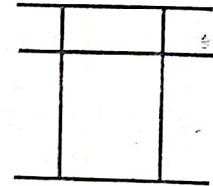
2 9



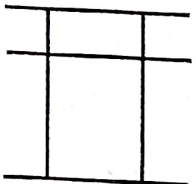
4 6



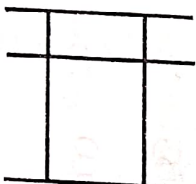
5 8



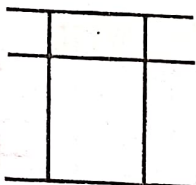
8 8



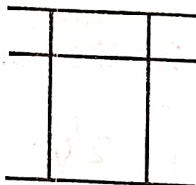
2 4



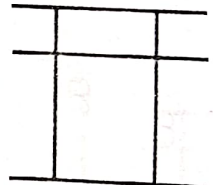
3 3



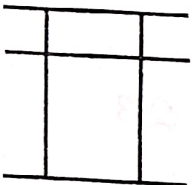
5 6



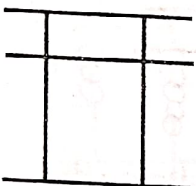
6 7



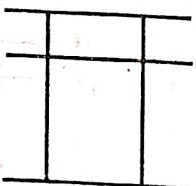
7 1



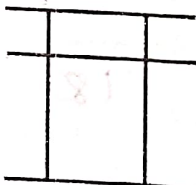
1 8



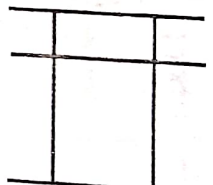
1 7



2 6



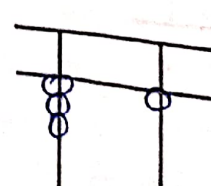
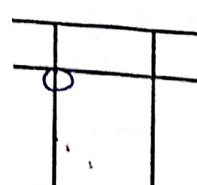
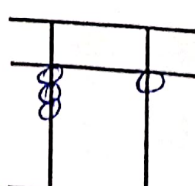
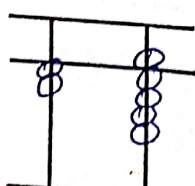
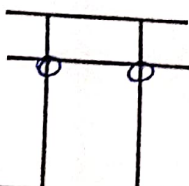
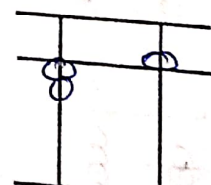
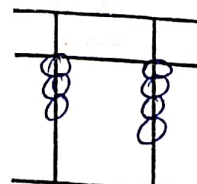
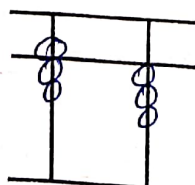
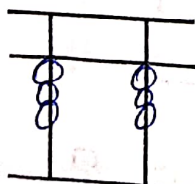
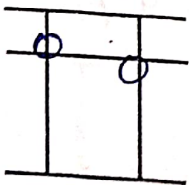
3 9

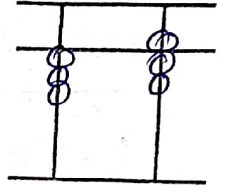
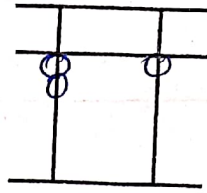
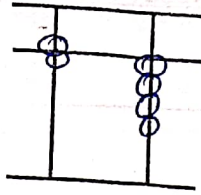
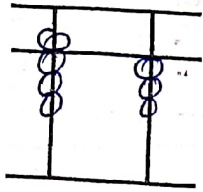
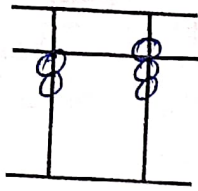


4 0

WRITE THE VALUE OF THE BEADS :

15 X 1 = 15





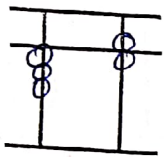
Addition (On Tool)

$10 \times 1 = 10$

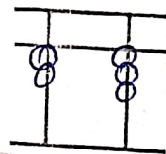
1	2	3	4	5	6	7	8	9	10
6	7	4	5	5	1	4	4	2	3
3	2	2	3	1	3	-1	-1	2	1
-6	-5	-9	-5	2	-2	-3	1	-3	-2
1	-2	8	-3	-5	1	2	-1	-1	5

Match the Following

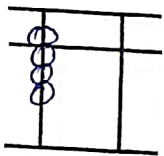
$10 \times 1 = 10$



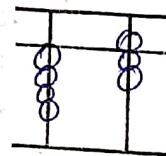
24



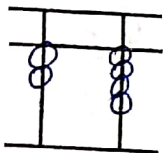
16



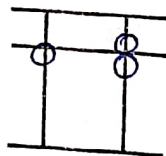
18



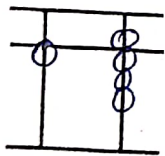
23



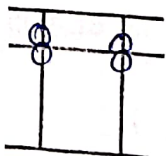
36



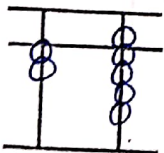
35



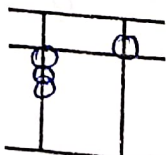
29



47



80



66

TABLE 1

TABLE 2

TABLE 3