

PRACTICE SHEET - 11

Org by - ABACUS ACADEMY, KALNA

SENIOR
Level

Name : _____

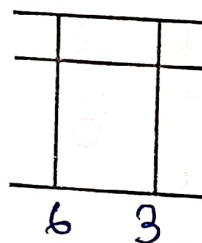
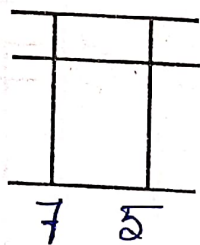
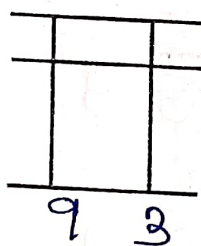
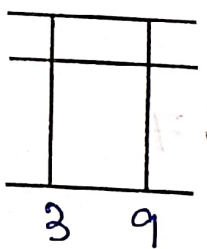
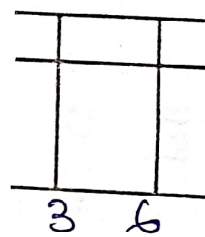
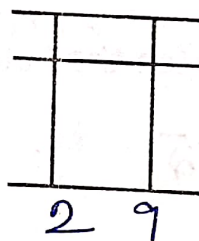
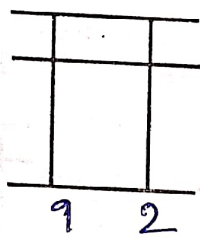
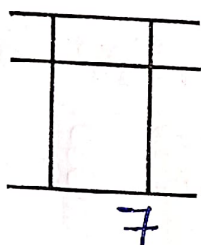
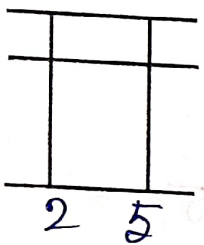
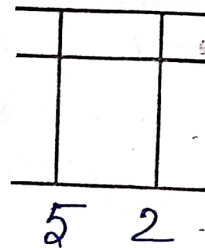
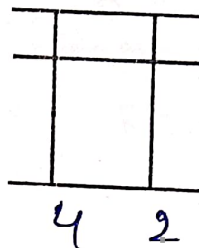
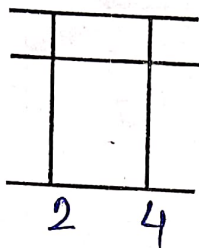
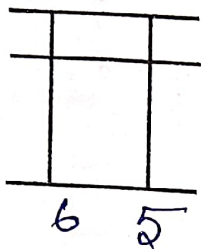
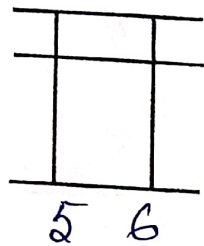
Centre Name : _____

TIME = 5 MIN

FULL MARKS = 50

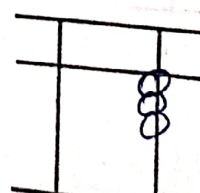
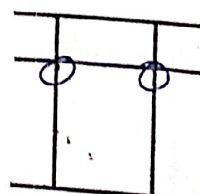
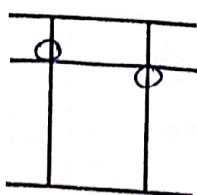

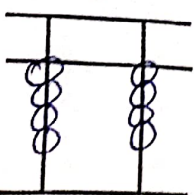
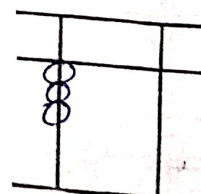
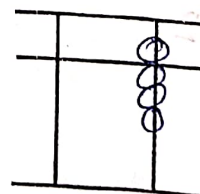
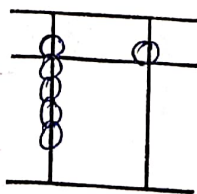
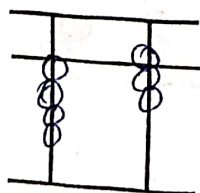
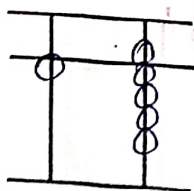
DRAW THE BEADS :

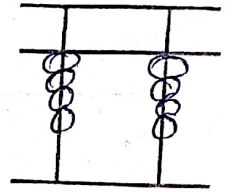
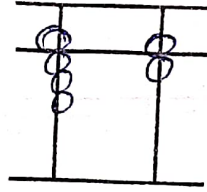
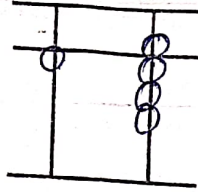
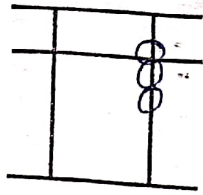
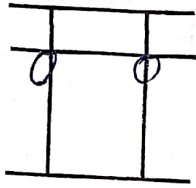
15 X 1 = 15



WRITE THE VALUE OF THE BEADS :

15 X 1 = 15





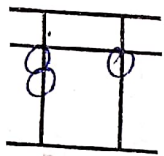
Addition (On Tool)

$10 \times 1 = 10$

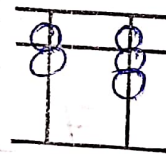
1	2	3	4	5	6	7	8	9	10
8	2	6	3	7	4	9	1	5	1
-7	7	3	6	-5	5	-8	8	3	3
6	-8	-7	-4	7	-6	6	-7	-8	5

Match the Following

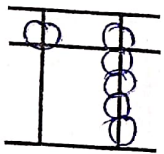
$10 \times 1 = 10$



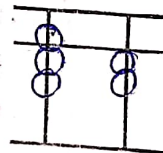
85



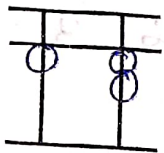
95



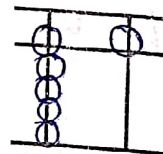
58



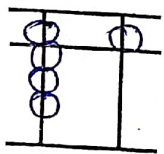
67



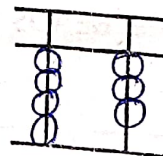
21



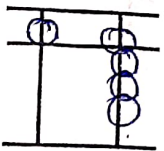
72



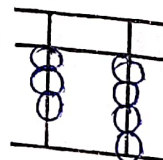
12



34



59



43

TABLE 1

TABLE 2

TABLE 3