

PRACTICE SHEET - 10

Org by - ABACUS ACADEMY, KALNA

SENIOR
Level

Name : _____

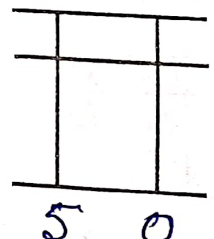
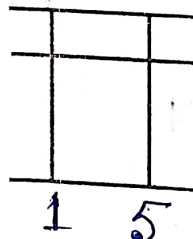
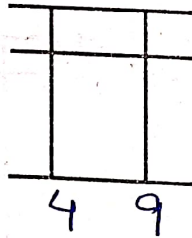
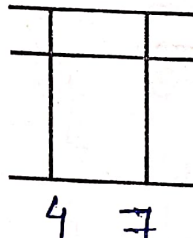
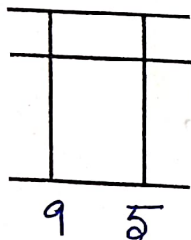
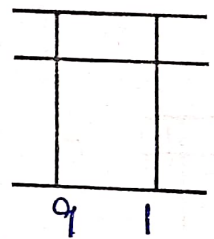
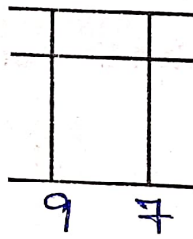
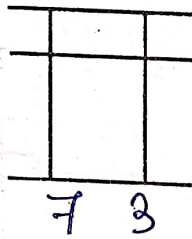
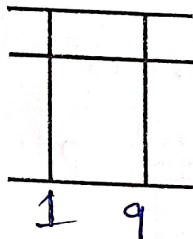
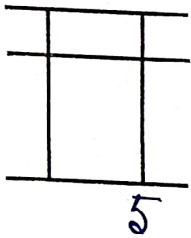
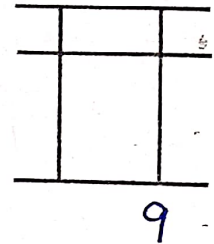
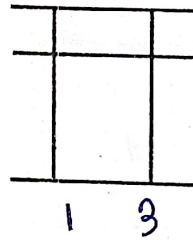
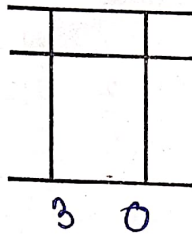
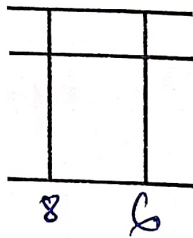
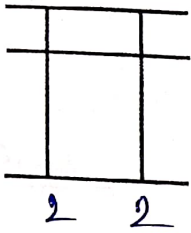
Centre Name : _____

TIME = 5 MIN

FULL MARKS = 50

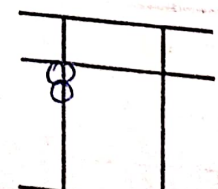
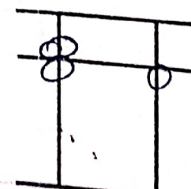
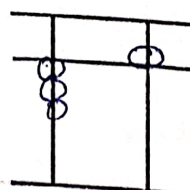
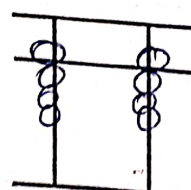
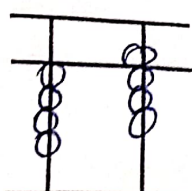
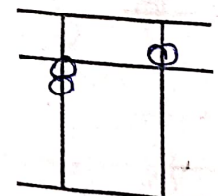
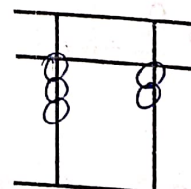
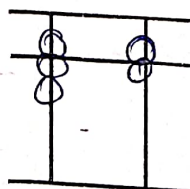
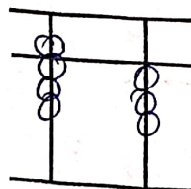
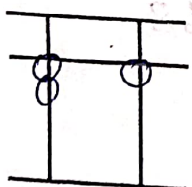
DRAW THE BEADS :

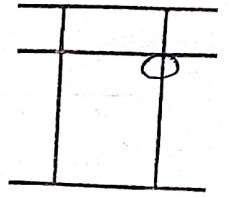
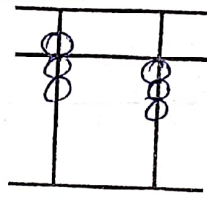
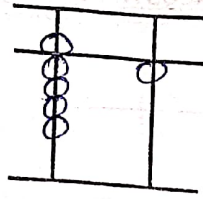
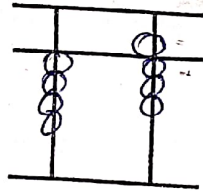
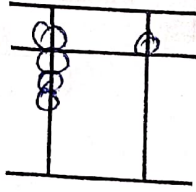
15 X 1 = 15



WRITE THE VALUE OF THE BEADS :

15 X 1 = 15





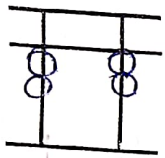
Addition (On Tool)

$10 \times 1 = 10$

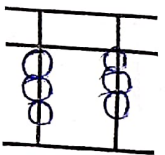
1	2	3	4	5	6	7	8	9	10
5	5	6	2	8	4	5	3	2	6
3	4	3	2	-6	5	3	1	7	3
-6	-6	-8	5	2	-9	-6	5	-8	3
0	1	7	-8	5	8	2	-9	6	-7
									0

Match the Following

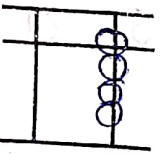
$10 \times 1 = 10$



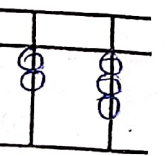
8



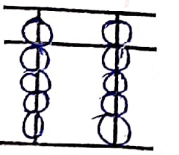
99



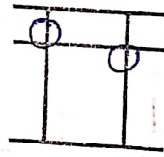
22



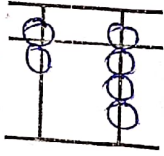
33



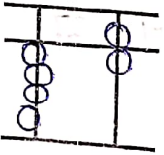
23



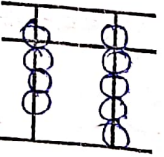
77



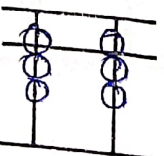
46



51



68



89

TABLE 1 _____

TABLE 2 _____

TABLE 3 _____