



PRACTICE SHEET - 1

Org by - ABACUS ACADEMY, KALNA

SENIOR
Level

Name : _____

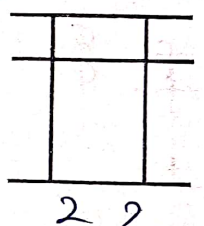


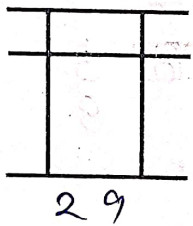
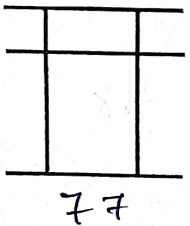
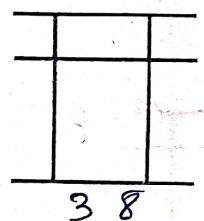
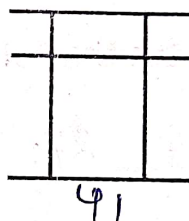
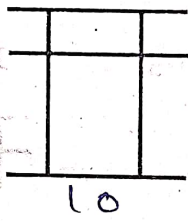
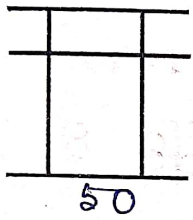
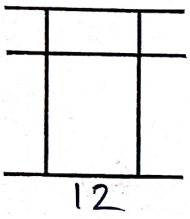
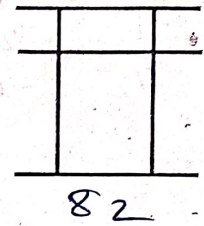
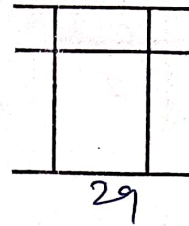
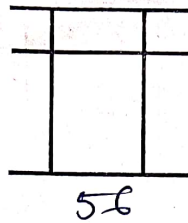
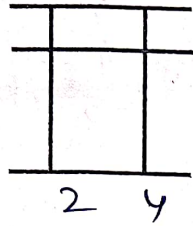
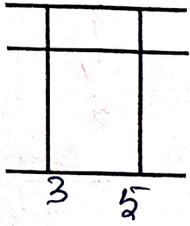
Centre Name : _____

TIME = 5 MIN

FULL MARKS = 50

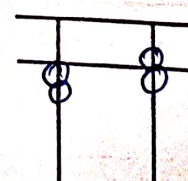
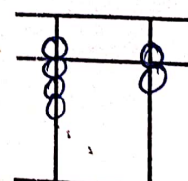
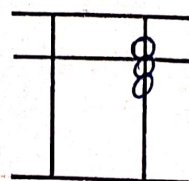
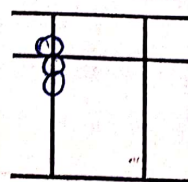
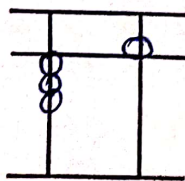
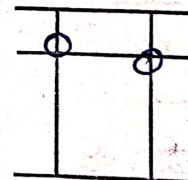
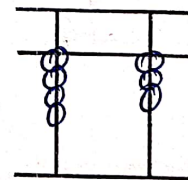
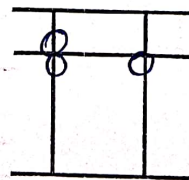
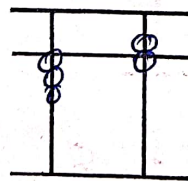
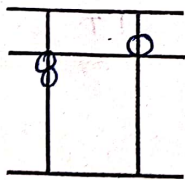
DRAW THE BEADS :

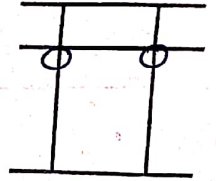
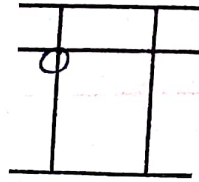
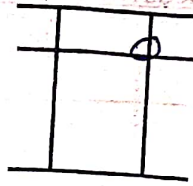
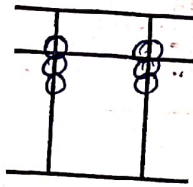
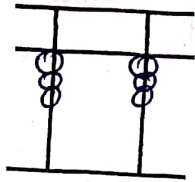
15 X 1 = 15



WRITE THE VALUE OF THE BEADS :

15 X 1 = 15





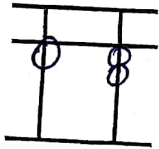
Addition (On Tool)

$10 \times 1 = 10$

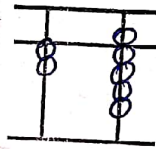
1	2	3	4	5	6	7	8	9	10
6	7	1	8	2	6	5	7	9	7
-1	2	6	-6	6	2	4	2	-4	2
4	-6	-2	5	-3	-5	-3	-4	2	-6

Match the Following

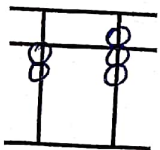
$10 \times 1 = 10$



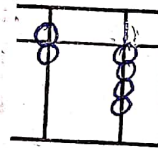
27



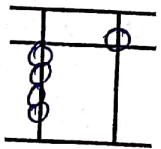
64



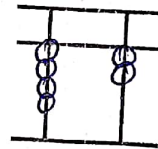
45



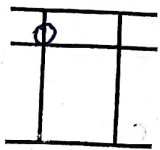
38



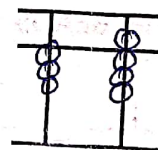
33



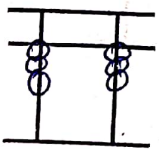
29



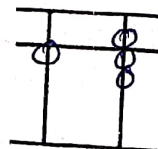
12



17



20



42

TABLE 1

TABLE 2

TABLE 3